
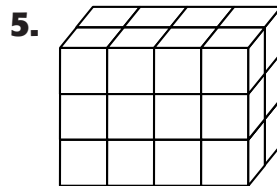

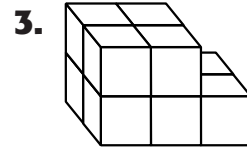
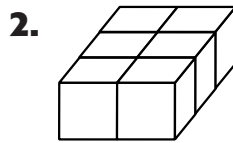
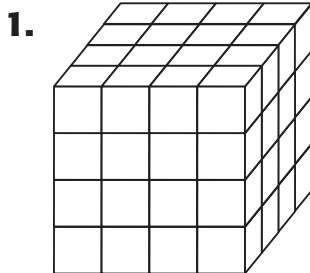


Homework Practice

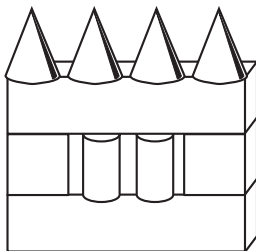
3MG1.2

Measurement: Volume

Find the volume of each solid figure.



Identify the figures that make this complex solid. (Lesson 10-9)



7. Name the solid figures in the complex figure below

8. Carmen and Luisa were carefully looking at a ferris wheel. What solid figures do you think they could find in that ferris wheel?