






**Homework Practice****3MG2.3, 3MG2.4***Quadrilaterals***Answer the following true (T) and false (F) questions.**

1. A rhombus is a quadrilateral. \_\_\_\_\_
2. Some quadrilaterals have parallel sides. \_\_\_\_\_
3. A trapezoid has two pairs of parallel sides. \_\_\_\_\_
4. A square is a parallelogram. \_\_\_\_\_
5. A square must have four right angles. \_\_\_\_\_
6. A trapezoid has right angles. \_\_\_\_\_

**On the grids below, draw the following quadrilaterals.**

7. a rhombus
8. a parallelogram
9. a trapezoid

**Draw each type of triangle. (Lesson 10-5)****10.****11.****12.****13.**

14. Draw an isosceles triangle.
15. Draw a scalene triangle.
16. Draw a right triangle.
17. Draw an equilateral triangle.