
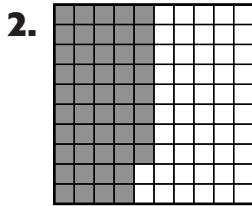



Homework Practice**3NS3.4***Hundredths***Write a fraction and a decimal for the part that is shaded.**





Write each decimal as a fraction.

4. 0.64 _____

5. 0.17 _____

6. 0.48 _____

7. 0.35 _____

Write each fraction as a decimal. (Lesson 13-1)

8. $\frac{3}{10}$ _____

9. $\frac{6}{10}$ _____

10. $\frac{2}{10}$ _____

11. $\frac{7}{10}$ _____

12. $\frac{4}{10}$ _____

Write each decimal as a fraction.

13. 0.1 _____

14. 0.3 _____