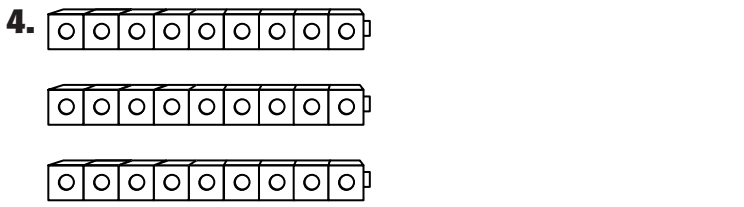

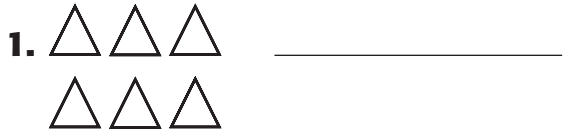


**Homework Practice****3AF1.5***Arrays and Multiplication***Write a multiplication sentence for each array. Then multiply.****Use the Commutative Property of Multiplication to find the missing number.**

5.  $3 \times 6 = 18$      $\square \times 3 = 18$                       6.  $7 \times 4 = 28$      $4 \times \square = 28$

7.  $8 \times 6 = 48$      $6 \times 8 = \square$                       8.  $5 \times 2 = 10$      $\square \times 5 = 10$

**Write an addition and a multiplication sentence. Then solve. (Lesson 4-1)**